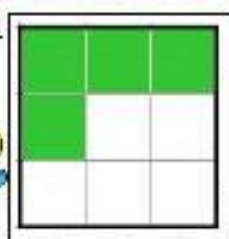


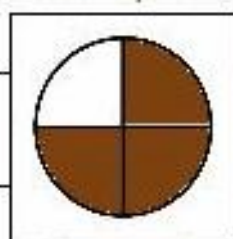
Labyrinthe : Fractions 1

Trouve la valeur des fractions et découvre quel schtroumpf fait battre le cœur de la schtroumpfette !

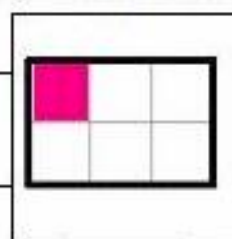
Départ :



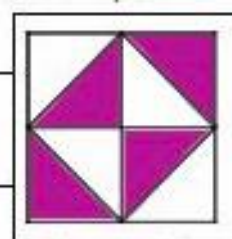
$$\frac{4}{9}$$



$$\frac{3}{4}$$



$$\frac{1}{5}$$

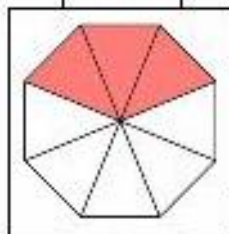


$$\frac{1}{2}$$

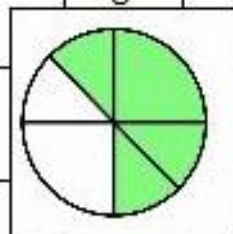
$$\frac{4}{5}$$

$$\frac{1}{3}$$

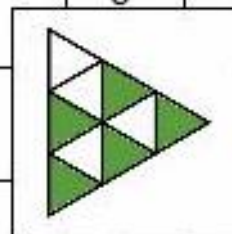
$$\frac{1}{6}$$



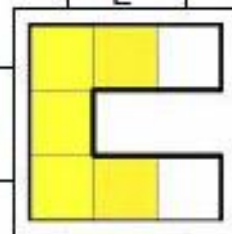
$$\frac{3}{8}$$



$$\frac{5}{7}$$



$$\frac{5}{9}$$

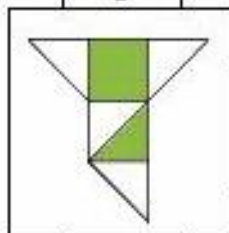


$$\frac{5}{7}$$

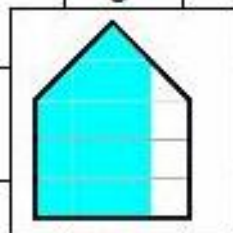
$$\frac{3}{5}$$

$$\frac{4}{6}$$

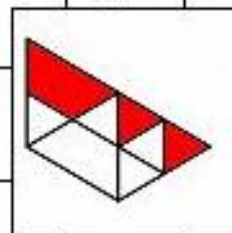
$$\frac{4}{5}$$



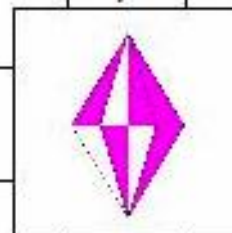
$$\frac{25}{32}$$



$$\frac{5}{12}$$



$$\frac{5}{8}$$

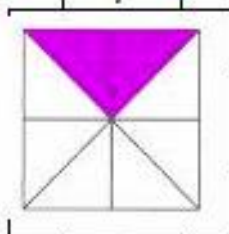


$$\frac{3}{9}$$

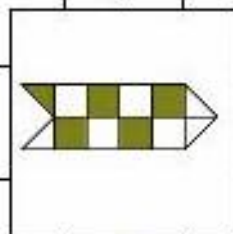
$$\frac{3}{7}$$

$$\frac{3}{4}$$

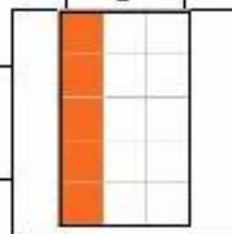
$$\frac{3}{8}$$



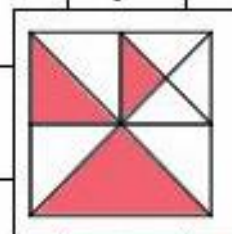
$$\frac{2}{4}$$



$$\frac{9}{20}$$



$$\frac{5}{15}$$

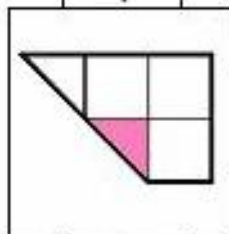


$$\frac{7}{16}$$

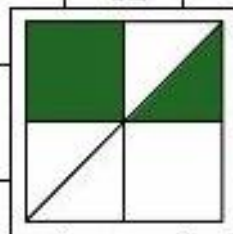
$$\frac{1}{4}$$

$$\frac{5}{12}$$

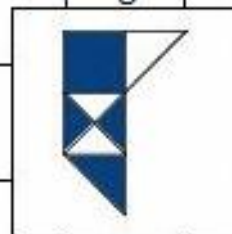
$$\frac{1}{3}$$



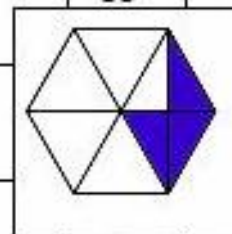
$$\frac{1}{8}$$



$$\frac{2}{6}$$



$$\frac{4}{7}$$



$$\frac{3}{12}$$

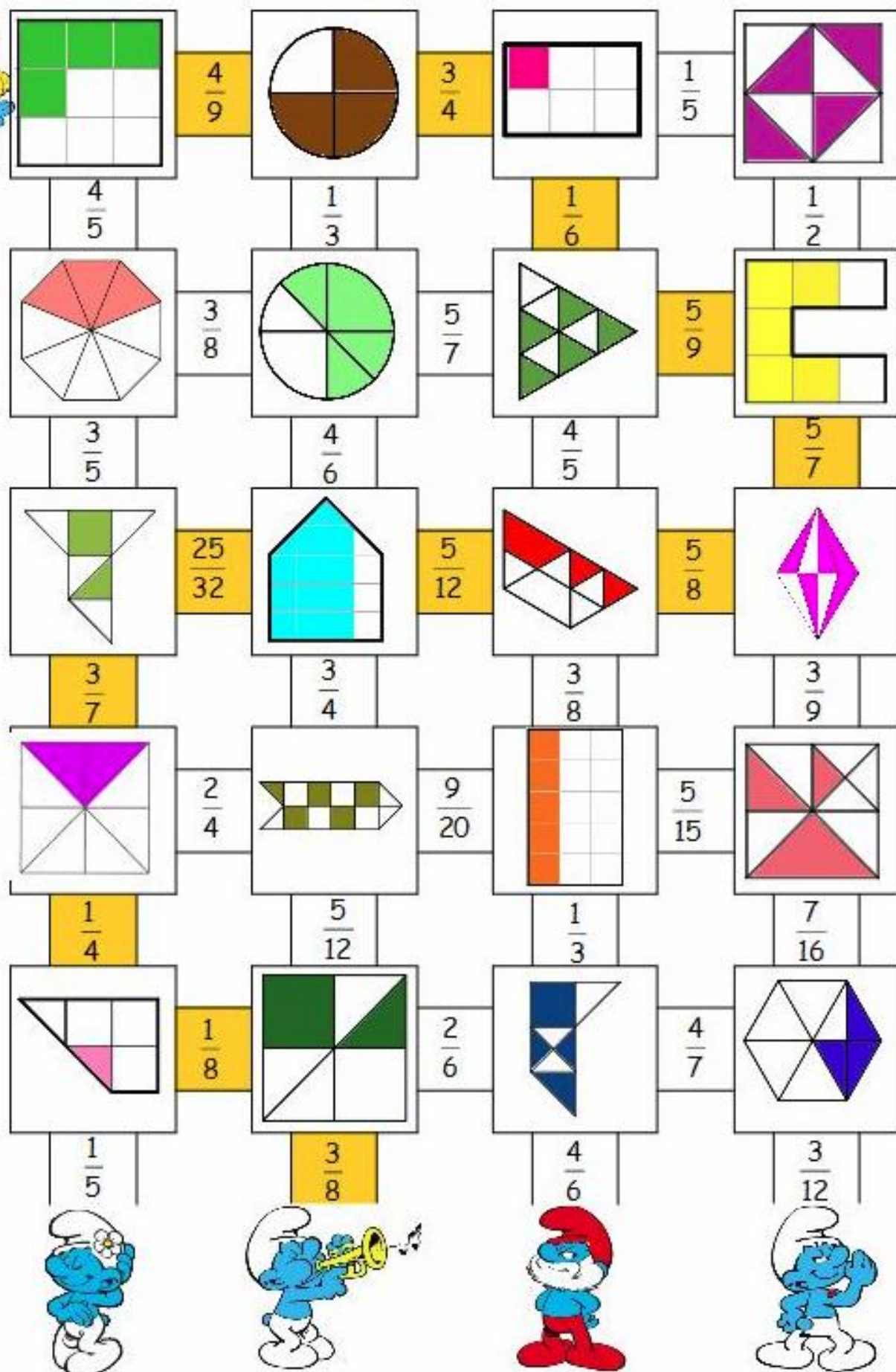
$$\frac{1}{5}$$

$$\frac{3}{8}$$

$$\frac{4}{6}$$



Solution





Labyrinthe : Fractions 2

Pars du bateau, trouve la valeur simplifiée de chaque fraction
et navigue jusqu'à l'île qui cache le trésor !

